

**D.A.V. MODEL SCHOOL, KSTP, ASANSOL**  
**HOLIDAY HOME WORK WORKSHEET- 1**  
**SESSION 2024-2025**

**Class: IV**

**Subject: ENGLISH**

**Name** \_\_\_\_\_ **Sec:** \_\_\_\_\_ **Roll No:** \_\_\_\_\_

**1. Read the following passage and answer the questions given below:**

Bears are found in Europe, Asia, Africa and America. They are massively built, with short tails and thick legs. Bears are not really carnivores. They eat almost anything, the chief exception in the polar bear, which in its natural state lives on fish and seals. However, in captivity, they seem to enjoy meat, vegetables, fruits, milk, rice and porridge. Bears are not quite as dangerous as people imagine them to be like most animals; they will do their best to avoid human beings. They have a special sense that is eyesight to see things.

i. Where are bears found?

- A. America      B. Australia      C. Arctic area      D. India

ii. What does a bear eat in captivity?

- A. Meat      B. Chapati      C. Seal      D. Trees iii.

What does a bear avoid like most animals?

- A. Hunters      B. Human beings      C. Fish      D. None of the above

iv. What kind of body do the bears have?

- A. Massively built      B. Weak      C. Fat      D. None

v. What is the strongest sense of a bear?

A. Touch

B. Sight

C. Smell

D. Hearing

2. Write the answers briefly ( 20-30 words)

a. Why was Rahul jealous of Raj?

-----  
-----

b. What warning did the Principal give Rahul?

-----  
-----

c. Why was everyone surprised to see the term end examination result?

d. What does the phrase 'marked me out' mean?

-----  
-----

e. Where was Sunil Gavaskar found after being missing in the hospital?

-----  
-----

3. Write the **meanings** of the following words and make a **sentence** with the word :

a. Apologized- -----

b. Trophy- -----

c. Congratulate - -----

**D.A.V. MODEL SCHOOL, KSTP, ASANSOL**  
**HOLIDAY HOME WORK WORKSHEET- 2**  
**SESSION 2024-2025**

**Class: IV**

**Subject: ENGLISH**

Answer the following questions:

- a. Do you think Rahul deserved the trophy? Explain your reasons.

-----  
-----  
-----

- b. What would have happened if Nan Kaka had not noticed the hole in the baby's ear?

-----  
-----

4. Fill in the blanks with correct **collective noun**

- a. A\_\_\_\_\_ of geese  
b. A\_\_\_\_\_ of soldiers  
c. A\_\_\_\_\_ of puppies  
d. A\_\_\_\_\_ of bouquet  
e. A\_\_\_\_\_ of singers

5. Rewrite the sentences with their **opposite gender**

- a. The master scolded his maid servant.

-----

- b. The dog ran behind the boy in the street.

-----

- c. The king announced his cabinet of ministers.

-----  
c. The Peacock is a beautiful male bird.

-----  
d. The fox cried out in pain at night.

-----  
6. Write a letter to your friend in Kolkata, telling him/her about your plans for your summer vacation this year. You are sneha/sameer.

**D.A.V. MODEL SCHOOL, KSTP, ASANSOL**  
**WORKSHEET - 1**  
**SESSION 2024-2025**

CLASS – IV

SUBJECT- HINDI

NAME:-.....SEC.....ROLL NO.....ADM. NO.....

1 प्रस्तुत गद्यांश को पढ़ कर पूछे गए प्रश्नों के उत्तर दें और तीन-तीन संज्ञा, युग्म और क्रिया वाले शब्द छाँट कर लिखिए-

पचास साल पहले टेलीविज़न नहीं था। उस समय लोग फिल्म देखने के लिए सिनेमाघरों में जाते थे। आज घर-घर में टेलीविज़न पहुँच गया है। टेलीविज़न मनोरंजन का अच्छा साधन है। इसमें हम फिल्में, नृत्य, गाने आदि कार्यक्रम देख सकते हैं। बच्चों के लिए टेलीविज़न पर कार्टून के कार्यक्रम भी आते हैं। अब हमें सर्कस देखने के लिए या क्रिकेट मैच देखने के लिए कहीं जाने की जरूरत ही नहीं है। हम ये कार्यक्रम घर बैठे देख सकते हैं। टेलीविज़न शिक्षा का भी साधन है। टेलीविज़न पर पेड़-पौधे उगाना, घर और बाहर की सफाई, नए-नए व्यंजन बनाना, स्वास्थ्य, योगासन आदि से संबंधित अनेक कार्यक्रम आते हैं। हम इन कार्यक्रमों से नई-नई बातें सीखते हैं। लेकिन पढ़ाई छोड़कर दिनभर टेलीविज़न देखना अच्छी बात नहीं है। बहुत पास से टेलीविज़न देखने पर आँखें भी खराब हो जाती हैं। अतः टेलीविज़न को कम समय व दूर से देखना चाहिए। टेलीविज़न मनोरंजन का उपयोगी साधन है।

क) टेलीविज़न पर कौन-कौन से मनोरंजक कार्यक्रम आते हैं?

उत्तर \_\_\_\_\_

ख) टेलीविज़न पर कौन-कौन से शिक्षाप्रद कार्यक्रम आते हैं?

उत्तर \_\_\_\_\_

<b>संज्ञा</b>			
<b>युग्म शब्द</b>			
<b>क्रिया शब्द</b>			



2 अनेक शब्दों के लिए एक शब्द लिखते हुए उनके चित्र बनाइए-

क) विद्यालय में पढ़ने वाला .....

ख) जो जूते सिलता हो .....

ग) जो सोने चाँदी के गहने बनाए .....

3 “जिन वर्णों पर चन्द्रबिंदु (ँ) रहता है, उन्हें बोलते समय हवा मुँह और नाक से एक साथ बाहर निकलती है।”  
नीचे दिए गए चित्रों के नाम लिखिए जिनमें चंद्रबिंदु का प्रयोग होता हो और उनका उच्चारण कीजिए-



4 निम्नलिखित प्रश्नों के उत्तर (20 से 25) शब्दों में लिखिए -  
क) कोई भी चीज़ गरम होने पर बड़ी हो जाती है- सुपंटी के मन में ऐसा विचार क्यों आया? क्या यह बात सही है?

---

---

---

ख) क्या गिरने और पिछड़ने पर हमें हार माननी चाहिए? क्यों?

---

---

5 निम्नलिखित प्रश्नों के उत्तर (30 से 35 शब्दों में) लिखिए-  
ग) बापू ने मनु की अनोखे ढंग से परीक्षा क्यों ली?

---

---

घ) बापू ने मनु को उसकी गलती का एहसास कराने के लिए क्या किया?

---

---

6. 'समय का महत्त्व' पर (60 शब्दों में) अनुच्छेद लिखिए।

---

---

---

---


---

---

1. नीचे दिए सहायता बक्से से व्यक्तिवाचक और जातिवाचक संज्ञा छाँट कर लिखिए -



सीता, मनु, गाय, बकरी, होली, कावेरी, दिन, जून,  
सोमवार, दिल्ली, कुत्ता, शहर, पूरब, दिशा, किताब,  
फल, आसनसोल, हिमालय, नदी



2. नीचे दिए शब्दों को बोलकर पढ़ो और अंतर लिखो -

क) कहा .....

ख) कहाँ .....

ग) चाटा .....

घ) चाँटा .....

ङ) आधी .....

च) आँधी .....

छ) काटा .....

ज) काँटा .....

3. नीचे दिए गए शब्दों के दो-दो पर्यायवाची शब्द लिखिए -

क) पेड़

ख) सूरज

ग) रात

घ) हिरन

ङ) जंगल





4. क) पाठ 'उलटा पुलटा' में आए जीव कभी हिम्मत नहीं हारते हैं। जब आप हिम्मत हारने लगते हैं तब आपकी मदद कौन करता है?

---

---

ख) मनु पत्थर लेने जाते समय स्वयंसेवक को साथ क्यों ले जाना चाहती थी?

---

---

ग) 'मुँह में पानी आना' मुहावरे का अर्थ लिखकर वाक्य में प्रयोग कीजिए।

उत्तर

---

---

5. दिए गए चित्र का वर्णन अपने शब्दों में लिखिए-



.....

.....

.....

.....

.....

.....

.....

.....

.....

.....

.....

.....

.....

.....

.....



**D.A.V. MODEL SCHOOL**  
**HOLIDAY HOMEWORK WORKSHEET – I**

**CLASS :IV**

**SUBJECT : BENGALI**

**NAME: \_\_\_\_\_ SEC: \_\_\_\_\_ ROLL: \_\_\_\_\_**

**TOPIC : ( মাকাল, বাল্মীকির রামায়ণ রচনা , পাগল ঠাকুর , পদ ও তার শ্রেণীবিভাগ :  
বিশেষ্য পদ , সর্বনাম পদ ও ক্রিয়াপদ )**

1. নিচের প্রশ্নগুলির পূর্ণ বাক্যে উত্তর দাও ।

ক) বাল্মীকি মূনির তপোবনটি কোথায় ছিল ?

উ: \_\_\_\_\_

খ) বাল্মীকির বলা কবিতার নাম 'শ্লোক' হল কেন ?

উ: \_\_\_\_\_

গ) বাল্মীকির শিষ্যটির নাম কি ছিল ?

উ: \_\_\_\_\_

ঘ) 'মাকাল' কবিতাটি কার লেখা ?

উ: \_\_\_\_\_

ঙ) রাখাল তার খাতার পাতায় কী লিখেছিল ?

উ: \_\_\_\_\_

2. নিচের প্রশ্নগুলির যথাযথ উত্তর দাও ।

ক) পাখিটিকে কে তীর মেরেছিল ? তাকে মৃত দেখে কে, কী করেছিলেন ?

উ: \_\_\_\_\_

\_\_\_\_\_

\_\_\_\_\_

\_\_\_\_\_

\_\_\_\_\_

\_\_\_\_\_

\_\_\_\_\_

খ) কোন্ কবিতা প্রথম কবিতা ? কে তা বলেছিলেন? কবিতাটির কী নাম হয়েছিল ?

উ: \_\_\_\_\_

\_\_\_\_\_

\_\_\_\_\_

\_\_\_\_\_

গ) 'বাঁদর নাম দিনু তোর মাকাল।' - কার উক্তি ? কাকে তিনি মাকাল নাম দিলেন ?

উ: \_\_\_\_\_

\_\_\_\_\_

\_\_\_\_\_

\_\_\_\_\_

3. অর্থ লেখ-

ক) বৃত্তান্ত - \_\_\_\_\_ খ) আকাল - \_\_\_\_\_

গ) বন্ধন - \_\_\_\_\_ ঘ) ব্যাধ - \_\_\_\_\_

4. বিপরীত শব্দ লেখ -

ক) উপস্থিত - \_\_\_\_\_ খ) মঙ্গল - \_\_\_\_\_

গ) আদর - \_\_\_\_\_ ঘ) সুখ - \_\_\_\_\_

5. ঠিক / ভুল লেখ।

ক) বাল্মীকি মুনি রামায়ণ রচনা করেন। [      ]

খ) শ্লোকে চার ভাগে সমান অক্ষর থাকে। [      ]

গ) বাল্মীকি দেবরাজ ইন্দ্রকে প্রথম শ্লোক শুনিয়েছিলেন। [      ]

ঘ) মাকাল ডাকটি আদরের। [      ]

ঙ) রাখাল পড়াশোনায় খুব ভালো ছিল। [      ]

6. নিচের প্রশ্নগুলি যথাযথ উত্তর দাও।

ক) পাগল পুরুত কে ?

উ: \_\_\_\_\_

\_\_\_\_\_

\_\_\_\_\_

খ) কে মন্দিরে এসে বিষয় চিন্তা করেছিল ?

উ: \_\_\_\_\_

গ) সারদামণি কে ছিলেন ?

উ: \_\_\_\_\_

ঘ) রানি রাসমণি কোথায় মন্দির প্রতিষ্ঠা করেছিলেন ?

উ: \_\_\_\_\_

ঙ) পাগল ঠাকুরের বাল্যকালের নাম কী ছিল ?

উ: \_\_\_\_\_

চ) নরেন কে ? তিনি কী নামে পরিচিত ছিলেন ?

উ: \_\_\_\_\_

7. অনুচ্ছেদ লেখ (১০ টি বাক্য) : বাংলায় গ্রীষ্ম

\_\_\_\_\_

\_\_\_\_\_

\_\_\_\_\_

\_\_\_\_\_

\_\_\_\_\_

\_\_\_\_\_

\_\_\_\_\_

\_\_\_\_\_

\_\_\_\_\_

\_\_\_\_\_

\_\_\_\_\_

\_\_\_\_\_

\_\_\_\_\_

\_\_\_\_\_

\_\_\_\_\_

\_\_\_\_\_

\_\_\_\_\_

\_\_\_\_\_

\_\_\_\_\_

\_\_\_\_\_

\_\_\_\_\_

\_\_\_\_\_

\_\_\_\_\_

---

---

---

---

---

---

8. সঠিক উত্তরটির উপর (✓) চিহ্ন দাও।

- ক) ব্যক্তিবাচক সর্বনাম হলো - ( এটা / আমি ) ।
- খ) শব্দের সাথে বিভক্তি যুক্ত হলে- ( পদ / বাক্য ) গঠিত হয় ।
- গ) নামপদের সাথে বিভক্তি যুক্ত হলে গঠিত হয়-( শব্দ / ধাতু ) বিভক্তি ।
- ঘ) পদ - ( ২ / ৩ ) ধরনের ।
- ঙ) মোট পদের সংখ্যা - ( চার / পাঁচ ) টি ।
- চ) 'দয়া' শব্দটি - ( ক্রিয়াবাচক / গুণবাচক ) বিশেষ্য ।
- ছ) 'যে','যারা'- এগুলিকে বলা হয় - ( প্রস্নবাচক / সম্বন্ধবাচক ) সর্বনাম ।

9. বামদিক ও ডানদিক মেলাও।

বামদিক

ডানদিক

- |                                   |                                     |
|-----------------------------------|-------------------------------------|
| ক) বিশেষ্য পদকে                   | i) ক্রিয়াবাচক বিশেষ্য।             |
| খ) ব্যাকরণের ভাষায় পদগুলির মধ্যে | ii) বাক্য সম্পূর্ণ করতে পারে না।    |
| গ) অসমাপিকা ক্রিয়াপদ             | iii) ছয় ভাগে ভাগ করা যায়।         |
| ঘ) সর্বনাম পদকে                   | iv) পারস্পরিক সম্পর্ককে বলে অস্বয়। |
| ঙ) 'শয়ন' শব্দটি হল               | v) চারটি ভাগে ভাগ করা যায়।         |

10.

ACTIVITY: গ্রীষ্মকালে পাওয়া যায় এমন পাঁচটি ফুল বা ফলের চিত্র অঙ্কন করে তাদের নাম বাংলা ও তামিল ভাষায় লেখ।

**DO THIS ACTIVITY IN COLOUR A4 PAGE AND PASTE IT NICELY IN YOUR BENGALI CLASS WORK COPY]**

**DAV MODEL SCHOOL, KSTP, ASANSOL**  
**HOLIDAY HOMEWORK (WORKSHEET - 1)**  
**SESSION - 2024-2025**

**SUBJECT – MATHEMATICS**

**CLASS- IV**

**NAME-** \_\_\_\_\_, **SEC-** \_\_\_\_\_, **ROLL No.-** \_\_\_\_\_

---

- 1) The successor of the greatest 6- digit number is \_\_\_\_\_  
a) 10,00,000    b) 1,00,000    c) 1,000    d) 100
- 2) For any 5 digit number how many periods are possible?  
a) 3                      b) 2                      c) 4                      d) 1
- 3) What is the place value of 6 in 28,650?  
a) 600                      b) 60                      c) 6000                      d) 6
- 4) Use 1,0,4,1,6 to build the smallest 5- digit number \_\_\_\_\_  
a) 10,146                      b) 11,640                      c) 10,461                      d) 10,641
- 5) Statement (A):  $7+5=5+7=12$ .  
Statement (B): you can add any two numbers in any order.  
a) Both A and B are true.                      b) Both A and B are false.  
c) A is true but B is false.                      d) A is false but B is true.
- 6) What is period and place of 6,43,926?
- 7) Add: 3,215 ;753 and 2,623.
- 8) Subtract: 32,795 from 86,123.

9) Write down the largest number and the smallest number of four digits in which no digit is repeated and also add them.

10) **CASE STUDY:** A student was asked to write numeral for seventy six thousand and five. He wrote 7,605. Find the difference between the correct answer and his answer.

**DAV MODEL SCHOOL, KSTP, ASANSOL**  
**HOLIDAY HOMEWORK (WORKSHEET - 2)**  
**SESSION - 2024-2025**

**SUBJECT – MATHEMATICS**

**CLASS- IV**

**NAME-** \_\_\_\_\_, **SEC-** \_\_\_\_\_, **ROLL No.-** \_\_\_\_\_

---

- 1) Write the largest 4- digit number \_\_\_\_\_  
a) 9,009            b) 1,000            c) 9,999            d) 9,000
- 2) The sum of the place value of 9 and 4 in the number 974301 is  
a) 940000            b) 900400            c) 900004            d) 904000
- 3) Write the missing number  $342+123=123+?$   
a) 465                b) 432                c) 342                d) 123
- 4) What is the successor of  $18000+888$ ?  
a) 18,889            b) 18,886            c) 18,885            d) 18,887
- 5) Statement (A): 17 is the successor of 16.  
Statement (B): In any number if we add 1 to that number then we get the successor of that number.  
a) Both A and B are true.                      b) Both A and B are false.  
c) A is true but B is false.                    d) A is false but B is true.
- 6) Write the numerals using commas between periods.  
a) Five lakh five thousand nine hundred sixty.  
  
b) Sixty two thousand six hundred sixty five.
- 7) Write the number names for the given numerals.  
a) 78,202:  
  
b) 99,999:
- 16) Find the difference of the numbers 65,468 and 5,23,482 also check the answer.

19) Write the number 5,86,546 in expanded form in three different ways.

20) **Case study:** In 2011, the population of a town was 8,56,233.  
If the number of females was 3,98,976. Find the number of males in the town.



**D.A.V. MODEL SCHOOL, KSTP, ASANSOL**

**SESSION 2024-2025**

**HOLIDAY HOMEWORK WORKSHEET**

**Class: IV**

**Subject: SCIENCE**

**NAME-\_\_\_\_\_SEC-\_\_\_\_ROLL NO\_\_\_\_\_**

---

1. Choose the correct answer from the given options:-

i) Digested food passes into the blood through walls of the:

(a) Small intestine

(b) Large intestine

(c) Rectum

(d) Anus

ii) The hardest substance in human body :

(a) Bone

(b) Enamel

(c) Muscles

(d) None of these

iii) The organ which secretes digestive juices in the small intestine, is the :

(a) Salivary Gland

(b) Liver

(c) Stomach

(d) food pipe

2. Statement 1 - Salivary glands help in digestion

Statement 2 - There are Five salivary glands

(a) Statement 1 is only correct

(b) Statement 2 is only correct

(c) Both statements are correct

(d) Both statements are incorrect

3. Statement 1 - Edible roots store food inside them

Statement 2 - Carrot is edible root

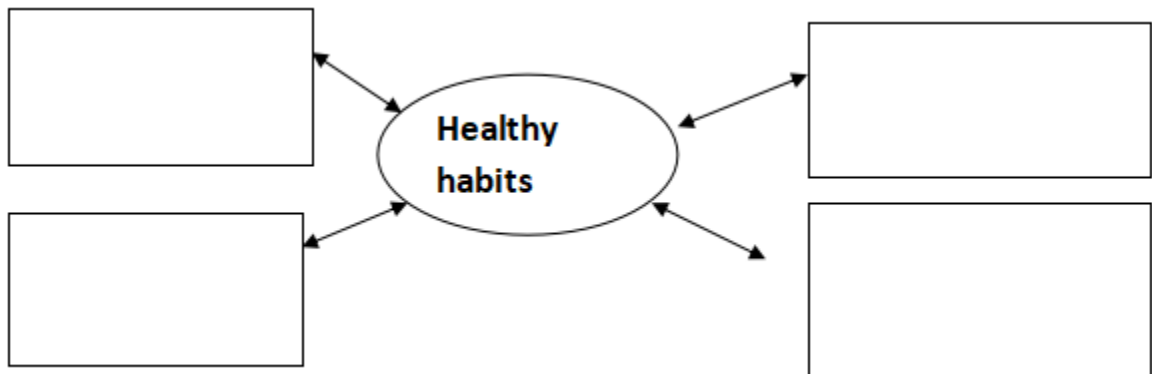
(a) Statement 1 is only correct

(b) Statement 2 is only correct

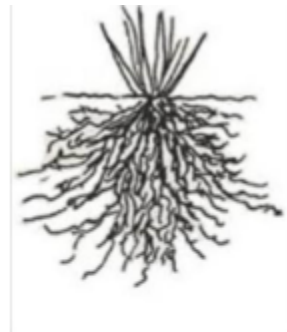
(c) Both statements are correct

(d) Both statements are incorrect

4. Write four good habits that should be taken care of at the time of eating food.



5. Identify the types of root and write two examples.



**Name of root**

**Examples**

6. Observe the given picture and answer the following questions:



a) Where does this plant grow?

---

b) What type of root do they have?

---

c) How does this plant perform breathing?

---

---

7. We have learnt that roots absorb water and minerals from the soil and the stem conducts these to leaves and other parts of the plant. The leaves prepare food. This food travels through the stem and is stored in different parts of plant. We eat some of these as roots— like carrot, radish, sweet potato and turnip . We also eat many other parts of a plant where food is stored.

Que.I) Among these plants, whose roots do we eat as vegetables?

- a) Radish    b) Carrot    c) Sweet potato    d) All of the above

Que.II) A type of roots, having the main root is called—




- a) Taproots    b) Lateral roots    c) Fibrous root    d) None of the above

Que.III) Briefly explain the function of the roots in plants?

---

---

8. Identify the types of teeth and complete the table:-

Teeth	Name of teeth	Total number of teeth	Function
			
			
			

9. Draw and colour one edible and one supportive root

--	--

**DAV MODEL SCHOOL K S T P ASANSOL**

**HOLIDAY HOMEWORK**

**SESSION – 2024-25**

**Sub- Social Science**

**WORKSHEET -1**

**page no 1**

**1. Tick the correct option:-**

**i. Who provides all the support to children in a nuclear family?**

- a. Uncle and Aunt ( ) b. Parents and siblings ( ) c. Both ( )  
d. None of these ( )**

**ii. Where do we get an environment of love care and belongingness?**

- a. Market ( ) b. Family ( ) c. Garden ( ) d. Shop ( )**

**iii. Where do children get training to grow up into good citizens?**

- a. Parks ( ) b. Cinema halls ( ) c. Home ( ) d. Garden**

**iv. How do children develop sensitivity towards others?**

- a. Watching films ( ) b. Reading books ( )  
c. Watching their parents ( ) d. None of these ( )**

**v. Who pass on values and family tradition to the younger generation.**

- a. The older family members b Guest c. Shop d. Market**

**2. Match the following:**

**i. Visually impaired a. bonds of love**

**ii. Hearing impaired b. use of touch**

**iii. Family c. sign language**

**iv. Joint family d. opportunities**

v. Special children

e. many nuclear families.

4. Answer the following questions :

page no 2

i. Mention the things children learn by watching the family members?

---

---

---

ii. State two reasons that are responsible for changing family fibre in india.

---

---

---

iii. Family celebrations are a time of enjoyment for all the members of a family . Name a family celebration that you enjoy the most and explain the reason for the same?

---

---

---

---

iv. List three important points that you will keep in mind if you take a blind person to a market.

---

---

---

v.” We develop an understanding for others in the society for a harmonious living “ . Explain.

---

---

---

---

vi. Why is it important to help others ? Explain with an example.

---

---

---

---

vii. What are the advantages of sharing your home with other members of family?

---

---

---

---

viii. Write some good habits that you have learnt from your friends.

---

---

---

---

ix. Write your responsibilities towards your family members?

---

---

---

---

x. How can you help your mother in her different household chores?

---

---

---

---

xi. How can the special children grow into useful members of the society?

---

---

---

---

**Map Skill** -----

x. On a outline of political map of India ,Locate,Colour and Label the following :---



**Maharastra**

**Gujarat**

**Tamil Nadu**



Karnataka

**HOLIDAY HOMEWORK**

**SESSION – 2024-25**

**WORKSHEET –ii**

**Sub- Social Science**

**1. Tick the correct option:-**

**pg.no. - 5**

**i. Who was king Mahabali?**

- a. Demon king of Kerala ( ) b. King of Tamilnadu ( )**  
**c. King of Maharastra ( ) d. Both b and c**

**ii. Vinayak Chaturthi is dedicated to the birth of lord-----**

- a. Krishna ( ) b. Ram ( ) c. Sudama ( ) d. Ganesh ( )**

**iii. Which calendar do Parsis follow?**

- a. Lunar ( ) b. Shehensahi ( ) c. Solar ( ) d. Both b and c**

**iv. Anand Karaj takes place in a ----**

- a. Mosque ( ) b. Gurudwara ( ) c. Temple( ) d. Garden ( )**

**2. Answer the following questions:**

**i. How did the students celebrate their school festival hilighting the Indian culture?**

---

---

---

---

**ii. How different it is celebrating the Durga Puja in west Bengal to the Navratri in Gujarat?**

---

---

**iii. What is the mythological story behind the festival Onam in Kerala?**

---

---

---

---

---

**iv. Who are the Parsis and how they celebrate their main festival Navroz?**

---

---

---

---

---

**v. What is the significance of festivals in our life?**

---

---

---

---

**vi. What is Idi and in which festival it is given ?**

---

---

---

---

---

**vii. How was the school decorated for the programme?**

---

---

---

---

---

---

**viii. How were the guests welcomed?**

**Pg.no.7**

---

---

---

**ix. who helped the students in their preparation for the programe?**

---

---

---

**x.What was the presentation by the students of Hansraj house?**

---

---

---

**xi.What is the another name of Ganesh Chaturthi?**

---

---

**xii.Which great Indian freedom fighter started Ganesh utsav as a public celebration and how?**

---

---

**3. Fill in the blanks:-**

**i. This festival marks the victory of good over evil. \_\_\_\_\_**

**ii. He presides over the Nikah \_\_\_\_\_**

iii. Whose idols are worshipped during Ganesh Chaturthi \_\_\_\_\_

iv. A ritual in Hindu wedding\_\_\_\_\_

4. Draw and colour your favourite festival. Pg.no.8

