

**D.A.V. MODEL SCHOOL, KSTP, ASANSOL**

**HOLIDAY HOMEWORK WORKSHEET**

**SESSION 2024-2025**

**CLASS: V**

**SUBJECT: ENGLISH**

**I. Read the following passage and answer the following questions:**

A farmer had five sons. They were strong and hardworking. But they always quarreled with one another. Sometimes, they even fought. The farmer wanted his sons to stop quarreling and fighting. He wanted them to live in peace. Plain words of advice or rebuke did not have much effect on those young people. The farmer always thought about what to do to keep his children united. One day he found the answer to his problem. So, he called all his sons together. He showed them a bundle of sticks and said, "I want any of you to break these sticks without separating them from the bundle." Each of the five sons tried one by one. They used their full strength and skill. But none of them could break the sticks. Then the old man separated the sticks and gave them just a single stick to break. They could break the stick easily. The farmer said, "A single stick by itself is weak. It is strong as long as it is tied up in a bundle. Likewise, you will be strong if you are united. You will be weak if you are divided.

**A. Fill in the blanks with the correct word out of the given words.**

Realized, knew, excellent, unity, peacefully, unite, strength

- a. Unity is \_\_\_\_\_.
- b. The farmer wanted his sons to live \_\_\_\_\_.
- c. He always thought how to \_\_\_\_\_ his sons.
- d. One day, he got an \_\_\_\_\_ idea.
- e. The sons \_\_\_\_\_ the importance of unity.

**B. Read the following statements. Write 'True' if the statement is True and write 'False' if the statement is false.**

- a. The farmer was worried about his sons. (\_\_\_\_\_)
- b. The sons were weak but hardworking. (\_\_\_\_\_)
- c. The sons failed to break the bundle of sticks. (\_\_\_\_\_)

- d. The farmer was happy with his sons. (\_\_\_\_\_)
- e. The farmer always tried to make his sons united. (\_\_\_\_\_)
- f. The farmer's sons obeyed him very much. (\_\_\_\_\_)

**II. Write the meaning of the following words and also make a sentence with the given word:**

a. Awful- \_\_\_\_\_  
\_\_\_\_\_

b. Moaning- \_\_\_\_\_  
\_\_\_\_\_

c. Aghast- \_\_\_\_\_  
\_\_\_\_\_

d. Sarcastic- \_\_\_\_\_  
\_\_\_\_\_

e. Pandemonium- \_\_\_\_\_  
\_\_\_\_\_

**III. Answer the following questions:**

a. Why do you think Tom did not like going to school? If you were Tom's friend, how would you counsel/convince him to attend the school regularly?

Ans. \_\_\_\_\_  
\_\_\_\_\_  
\_\_\_\_\_

b. Do you think Shankar or Pea had written the word 'Tail' on the blackboard? Give a reason for your answer.

Ans. \_\_\_\_\_  
\_\_\_\_\_  
\_\_\_\_\_

**D.A.V. MODEL SCHOOL, KSTP, ASANSOL**

**HOLIDAY HOMEWORK WORKSHEET**

**SESSION 2024-2025**

**CLASS: V**

**SUBJECT: ENGLISH**

**I. Complete the sentences by using the abstract nouns provided in the help box:**

Darkness, childhood, inspiring, thirst, kindness

- a. Her speech was extremely \_\_\_\_\_.
- b. Their eyes adjusted to the \_\_\_\_\_.
- c. Mother Teresa is known for her \_\_\_\_\_.
- d. I need water to quench my \_\_\_\_\_.
- e. He spent his \_\_\_\_\_ in Paris.

**II. Encircle the abstract noun in the following sentences:**

- a. Lara had a great trust for the police officer.
- b. The dove is a symbol of peace.
- c. My grandmother is full of wisdom.
- d. He takes pride in his job.
- e. Mike shares lots of love with his family.



**D.A.V. MODEL SCHOOL, KSTP, ASANSOL**  
**HOLIDAY HOMEWORK (SUMMER VACATION)**  
**SESSION: 2024-2025**  
**WORK SHEET NO.:- 1**

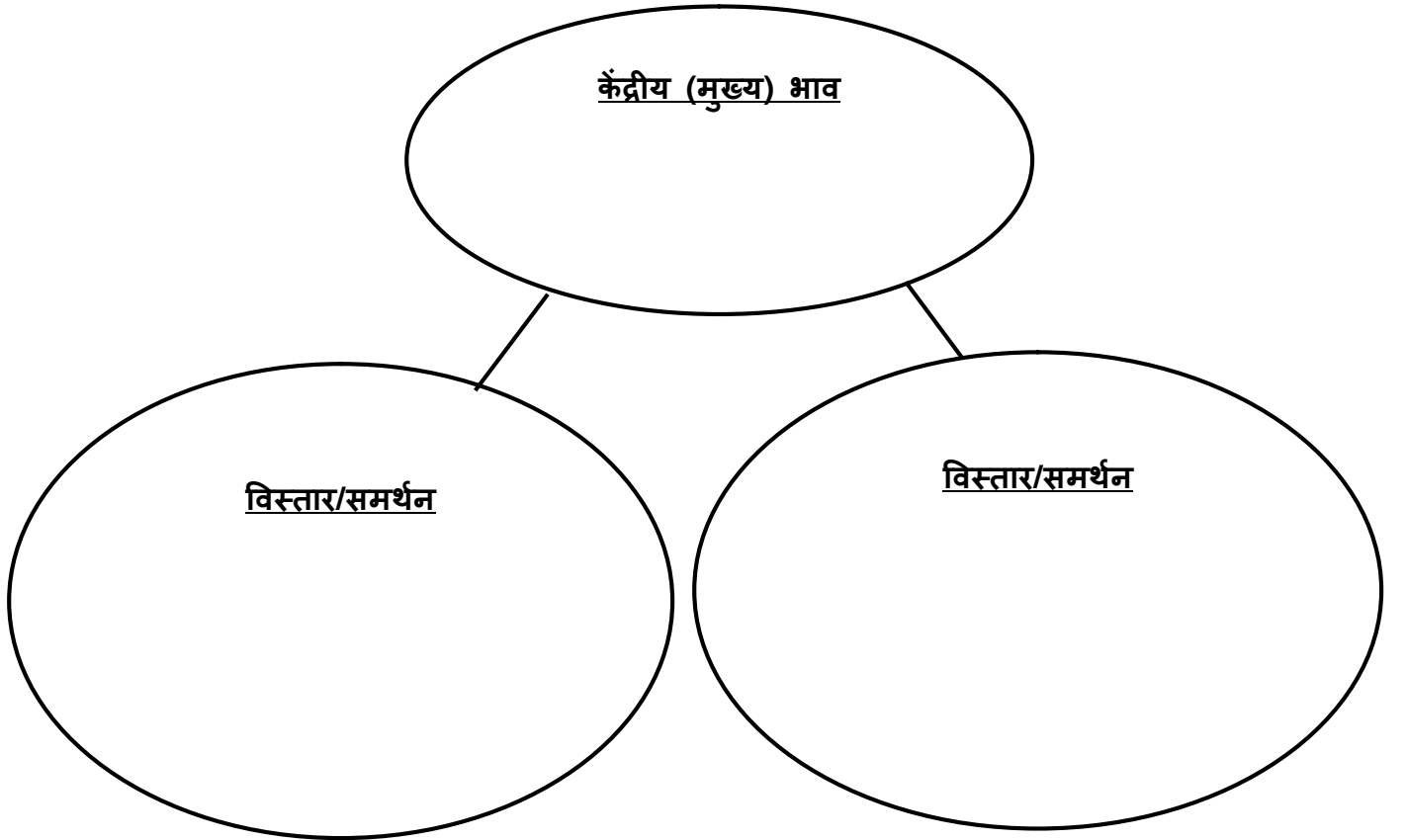
**SUBJECT: HINDI (2<sup>nd</sup> Language)**

**CLASS: V**

Name \_\_\_\_\_ Roll No: \_\_\_\_\_ Section: \_\_\_\_\_

1) प्रस्तुत गद्यांश का केंद्रीय भाव और केंद्रीय भाव का समर्थन करने वाले दो विस्तार फ़्लो-चार्ट के माध्यम से लिखिए।

अनुशासन का अर्थ होता है नियमों एवं विधियों का पालन करना। हम सभी के जीवन में अनुशासन सबसे महत्वपूर्ण है। हमें अनुशासन का हर समय पालन करना चाहिए। अनुशासन के बिना सुखी जीवन जीना मुश्किल है। अनुशासन हमें सही रास्ते पर ले जाता है। अनुशासन का पालन करने से हम जीवन में नयी-नयी ऊँचाइयों को छू सकते हैं। अपने जीवन में सफलता प्राप्त करने के लिये अनुशासन का होना आवश्यक है। अनुशासन की वजह से हम आलस और सभी बुरी आदतों से दूरी बना सकते हैं। अनुशासन हमारे जीवन को सार्थक बनाता है और हमारे बेहतर चरित्र का निर्माण करता है।



2) उचित संबंध ज्ञात करके लिखिए।

A) नाचना : क्रिया :: पेड़ : ?

क. उपसर्ग

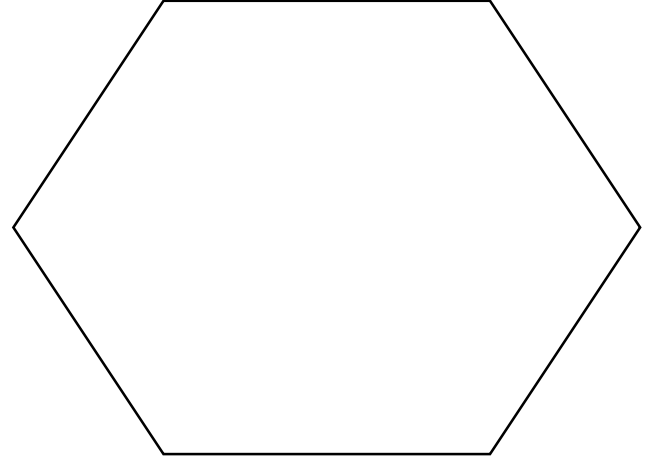
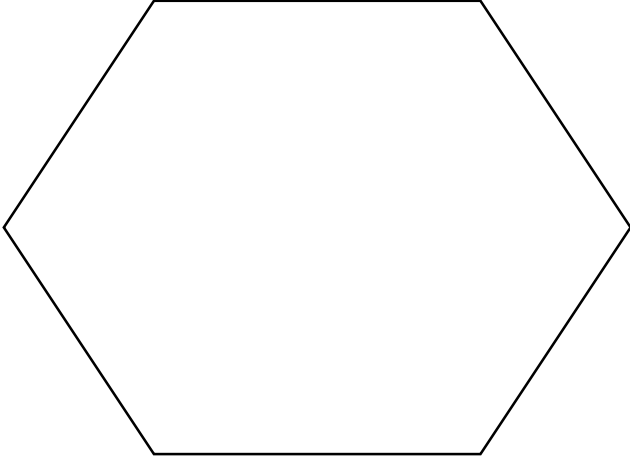
ख. प्रत्यय

ग. सर्वनाम

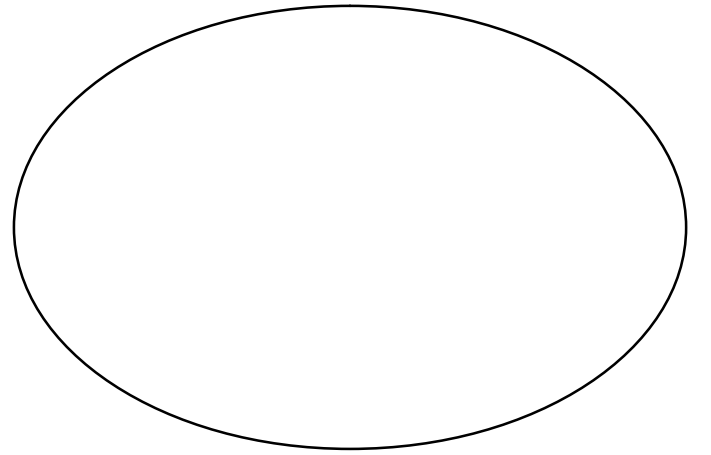
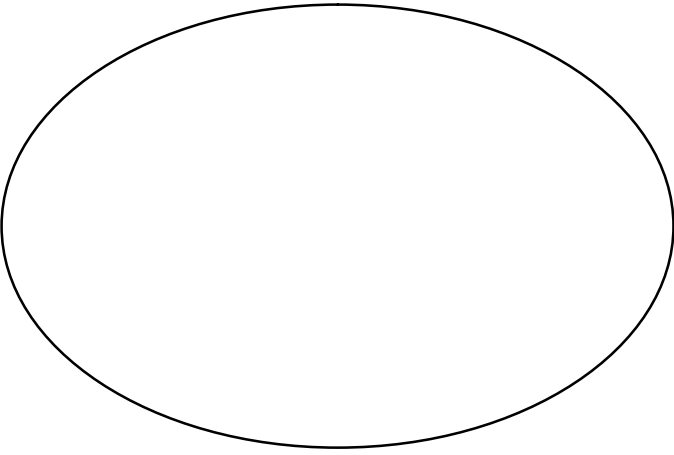
घ. जातिवाचक संज्ञा

\_\_\_\_\_

B) स्त और क्श संयुक्त व्यंजन वाले एक-एक शब्द लिखिए और उसका चित्र बनाइए।



C) एक जातिवाचक और एक व्यक्तिवाचक संज्ञा शब्द लिखकर उसका चित्र बनाइए।



D) निम्नलिखित कथन का उचित विकल्प चुनकर लिखिए :-

i) कथन - 'पुरानी हवेली' में 'पुरानी' शब्द विशेषण है।

कारण - जिन शब्दों से काम के होने का बोध होता है, उन्हें 'क्रिया' कहा जाता है।

क) कथन और कारण दोनों सही हैं क्योंकि कारण कथन की सही व्याख्या करता है।

ख) कथन और कारण दोनों सही हैं परंतु कारण कथन की सही व्याख्या नहीं करता है।

ग) कथन सही है, परंतु कारण गलत है।

घ) कथन गलत है, परंतु कारण सही है।

---

---

**D.A.V. MODEL SCHOOL, KSTP, ASANSOL**  
**HOLIDAY HOMEWORK (SUMMER VACATION)**  
**SESSION: 2024-2025**  
**WORK SHEET NO.:- 2**

**SUBJECT: HINDI (2<sup>nd</sup> Language)**

**CLASS: V**

Name \_\_\_\_\_ Roll No: \_\_\_\_\_ Section: \_\_\_\_\_

1) प्रस्तुत गद्यांश में दिए गए वाक्यों को फ़्लो-चार्ट के माध्यम से सही क्रम में लिखिए।

फिर रीमा की माँ उसे घर ले जाती है। खेलते समय रीमा को चोट लग जाती है। डॉक्टर, रीमा की चोट पर पट्टी बाँधते हैं और उसे कुछ दवाइयाँ भी देते हैं। रीमा की माँ उसे जल्दी-जल्दी डॉक्टर के पास ले जाती है।



2) क) निम्नलिखित प्रश्नों के उत्तर 20-25 शब्दों में लिखिए :-

i) अगर होजा नहीं होता, तो क्या होता?

---

---

ii) सरदार पटेल की तीन विशेषताएँ लिखिए।

---

---

iii) पेड़ हमारे मित्र हैं, कैसे?

---

---





**D.A.V. MODEL SCHOOL**  
**HOLIDAY HOMEWORK WORKSHEET – I**

**CLASS : V**

**SUBJECT : BENGALI**

**NAME: \_\_\_\_\_ SEC: \_\_\_\_\_ ROLL: \_\_\_\_\_**

**(TOPIC: ( ভবচন্দ্র রাজা ও গবচন্দ্র মল্লী, শিশু , ব্রাহ্মণের কুসংস্কার , সমোচ্চারিত ভিন্নার্থক শব্দ )**

1. নির্দেশ অনুযায়ী নিম্নলিখিত প্রশ্নের উত্তর দাও

ক) সঠিক উত্তরটির উপর(✓) চিহ্ন দাও।

i) 'অভিরাম' শব্দের অর্থ - ( অবিশ্রান্ত / আচ্ছাদন / সুন্দর )।

ii) 'দেশের উন্নতি সাধনের জন্য প্রয়োজন পারস্পরিক রাজ্যগুলির মধ্যে থেকে দূর করা ' - এখানে **দেষ** শব্দের অর্থ হলো ( ভূখণ্ড / দুর্ভিক্ষ / হিংসা )।

iii) 'তরী' কথার অর্থ ( নৌকা / সমুদ্র / বালি )।

iv) ব্রাহ্মণের বস্ত্র ( পাখিতে /ইঁদুরে / পিঁপড়ে ) কেটেছিল।

খ) সত্য / মিথ্যা লেখ।

i) বুদ্ধদেব ওই কাপড় ও চাদর পরে হাসতে হাসতে বেণুবনের দিকে চলে গেলেন। \_\_\_\_\_

ii) 'কোমল' শব্দের অর্থ - পদ্ম। \_\_\_\_\_

iii) 'তুলা' শব্দের অর্থ - ওজন। \_\_\_\_\_

iv) ভবচন্দ্র ছিলেন একজন বুদ্ধিমান রাজা। \_\_\_\_\_

গ) শূন্যস্থান পূরণ কর।

বিপুল নীল \_\_\_\_\_ পরি

ভাসায় তারা খেলার \_\_\_\_\_

আপন হাতে \_\_\_\_\_ গড়ি

\_\_\_\_\_ গাঁথা ভেলা।

ঘ ) নিচের সমোচ্চারিত শব্দগুলির অর্থ পার্থক্য লেখ এবং শব্দগুলি দিয়ে বাক্য গঠন করো।

i) দিন \_\_\_\_\_

দীন \_\_\_\_\_

ii) নীর \_\_\_\_\_  
নীড় \_\_\_\_\_

iii) শয্যা \_\_\_\_\_  
সজ্জা \_\_\_\_\_

iv) অকাল \_\_\_\_\_  
আকাল \_\_\_\_\_

v) কমল \_\_\_\_\_  
কোমল \_\_\_\_\_

2. নিচের প্রশ্নগুলির পূর্ণ বাক্যে উত্তর দাও।

ক) বুদ্ধদেব কোথায় বসবাস করছিলেন ?

\_\_\_\_\_  
\_\_\_\_\_

খ) 'শিশু' কবিতাটিতে কাদের কথা বলা হয়েছে ?

\_\_\_\_\_  
\_\_\_\_\_

গ) পথিক দুজন কী উদ্দেশ্যে সরোবরের তীরে চুলা কাটছিল ?

\_\_\_\_\_  
\_\_\_\_\_

ঘ) ব্রাহ্মণ বস্তুগুলি কোথায় ফেলার আদেশ দেন ?

\_\_\_\_\_  
\_\_\_\_\_

ঙ) বড়ো শূলটিতে কে চড়েছিল ?

\_\_\_\_\_  
\_\_\_\_\_

3. নিচের প্রশ্নগুলির যথাযথ উত্তর দাও।

ক) 'শিশু' কবিতাটি কার লেখা ? কোন্ কাব্যগ্রন্থ থেকে কবিতাটি নেওয়া হয়েছে ?

---

---

---

---

---

---

---

---

খ) শিশুরা কীভাবে ভেলা তৈরি করে ? ওই ভেলা তারা কোথায় ভাসায় ?

---

---

---

---

---

---

---

---

গ) 'ভবচন্দ্র রাজা ও গবচন্দ্র মন্ত্রী' গল্পটি পড়ে তুমি কী শিক্ষা পেলে ?

---

---

---

---

---

---

---

---

ঘ) 'এটা অবশ্য হস্তী; না খাইয়া রোগা হইয়াছে।' - কে কী দেখে কখন এই উক্তি করেন?

---

---

---

---

---

---

---

---



DAV MODEL SCHOOL, KSTP, ASANSOL

HOLIDAY HOMEWORK (WORKSHEET - 1)

SESSION: 2024-2025

SUBJECT: MATHEMATICS

CLASS: V

Name: \_\_\_\_\_ Roll No: \_\_\_\_\_ Section: \_\_\_\_\_

A. Multiple Choice Questions:

1. Which two numbers in the box below have a difference of 18?

67	48	113	85	130
----	----	-----	----	-----

(a) 48, 67 (b) 113, 130 (c) 85, 130 (d) 67, 85.

2. Which of the following could be written as Six and a half Thousand?

(a) 6050 , (b) 6500 , (c) 6550, (d) 6000 .

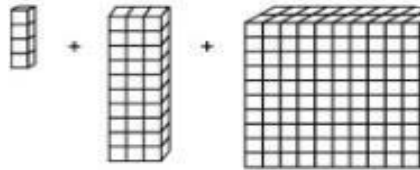
3. A man wanted to use his calculator to subtract 984 from 2503. He entered 2303 – 984 by mistake. What could he do to correct his mistake?

(a) Add 2 , (b) Subtract 2 , (c) Add 200 , (d) Subtract 200 .

4.  $217 + 398 + 783 - 308 + 7$  equals

(a) 1195 , (b) 1097 ,(c) 1083 ,(d) 997 .

5. If  represents ten, then given image represents how much?



(a) 234 (b) 432 (c) 2340 (d) 4320 .

B.Short answer type questions:

6. Divide 3,000 by 45 and check your answer.

---

---

---

---

---

---

---

7. Fill in the blanks :

(a)  $\square \div 45 = 0$  , (b)  $56700 \div 1 = \square$  , (c)  $1111 \div 11 = \square$  , (d)  $468 \div \square = 1$ .

(e)  $784 + 361 + \underline{\hspace{2cm}} = 426 + \underline{\hspace{2cm}} + 784$ ,



**DAV MODEL SCHOOL, KSTP,**  
**ASANSOL HOLIDAY HOMEWORK**  
**(WORKSHEET - 2)SESSION: 2024-**

**2025**

**SUBJECT: MATHEMATICS**

**CLASS: V**

**Name:** \_\_\_\_\_ **Roll No:** \_\_\_\_\_ **Section:** \_\_\_\_\_

**A. Multiple Choice Questions:**

1. The number that is 100 less than 10000 is-

(a) Nine thousand , (b) Nine thousand nine hundred , (c) Ten thousand nine hundred ,(d) Nine thousand nine hundred and ninety .

2.  $95 + 95 + 95 + 95 + 95 - 93 - 93 - 93 - 93 - 93 = 5$  times

The number that should be in the empty box is-

(a) 2 , (b) 5 , (c) 93 ,(d) 95 .

3. P, Q, R and S are four 4-digit numbers, each having the digit 9 only once and in the place shown. None of the other digits are known.

**P**

9			
---	--	--	--

**Q**

	9		
--	---	--	--

**R**

		9	
--	--	---	--

**S**

			9
--	--	--	---

What can be said with certainty about P, Q, R and S?

(a) S is the smallest of the 4 numbers. , (b) Q is larger than R ,(c) P is the largest of the numbers.(d) S is the only odd number among the 4 numbers.

4. In which of the following numbers does the digit 1 have a place value of 10?

(a) Three thousand and one (b) One thousand two hundred and five,(c) Five thousand and nineteen ,(d) Seven thousand one hundred and two.

5. 21 hundred, 35 tens, and 4 ones are equal to

(a)2139 ,(b)2454, (c)21354,(d)21390.

**B. Short Answer Type Questions:**

6. A dealer purchased 395 washing machines. If the cost of one washing machine is Rs.9,396, find the cost of the purchased washing machines.

**7. Match the following column:**

<b>Column -A</b>	<b>Column -B</b>
(i) 2 million =	(a)2 lakhs
(ii) 20 million=	(b)20 crores
(iii) 200 million =	(c)20 lakhs
(iv) 200 thousands=	(d)2 crore

8. During floods, 6,875 villagers became homeless. The government put up tents, each tent housing 275 villagers. How many tents were put up?

9. In an election, the winning candidate got 6,28,496 votes and his rival got 4,56,298 votes. If 3,846 votes were declared invalid. Then answer the following questions.

- (i) What was the total number of votes polled?
- (ii) How many more votes got the winning candidate than rival candidate.

**10. CASE STUDY BASED QUESTION :**

Given below are the land areas of the four largest countries of the world. study the list and answer the question below.

<b>Country</b>	<b>Approximate area in Sq.km.</b>
China	95,96,960
USA	96,29,091
Russia	1,70,75,200
Canada	99,84,670



- a) Which is the largest country in the above table?
- b) What is the difference between the largest and smallest country in the above table?
- c) What is the place value and face value of the digit 8 in the area of Canada?
- d) What is the area of the smallest country in the above table?

**DAV MODEL SCHOOL, KSTP, ASANSOL**

**SESSION 2024 – 25**

**HOLIDAY HOMEWORK**

**SUBJECT: SCIENCE**

**WORKSHEET 1**

**NAME \_\_\_\_\_ CLASS \_\_\_\_ SEC \_\_\_\_ ROLL NO \_\_\_\_**

**Q1. Heart : circulatory system :: \_\_\_\_\_ : nervous system**

- a) Lungs
- b) Kidney
- c) Bones
- d) Brain

**Q2. Spinal cord is a part of \_\_\_\_\_**

- a) Circulatory system
- b) Nervous system
- c) Digestive system
- d) Urinary system

**Q3. As a child you have about \_\_\_\_\_**

- a) 206
- b) 400
- c) 200
- d) 306

**Q4 and Q5 are Assertion Reason type questions. Choose among the following options:-**

- A) BOTH Assertion & Reason are correct and Reason is the correct explanation of the Assertion
- B) BOTH Assertion & Reason are correct and Reason is the NOT the correct explanation of the Assertion
- C) Assertion is true but Reason is false
- D) Assertion is false but Reason is true

**Q4. Assertion (A): The body breaks down complex substances in food into smaller components in the digestive system.**

**Reason (R): Breaking down of food into simpler substances helps in easy and efficient absorption of nutrients.**

---

---

**Q5. Assertion :** Organ-system is the system in which several organs work together for the same function, e.g., digestion, circulation and respiration.

**Reason:** The organ-system helps in efficient working of the body.

---

---

**Q6. What is a bone , and how many bones are there in the adult human body ?**

---

---

---

---

**Q7. What do you understand by the terms “inhalation” and “exhalation” ?**

---

---

---

---

**Q8. Name the main parts of the skeletal system **and their functions** ?**

---

---

---

---

---

---

---

---

---

---

---

---

**Q9. The adult human skeleton is made up of 206 bones. These include the bones of the skull, spine (vertebrae), ribs, arms and legs. Bones are made of connective tissue reinforced with calcium and specialised bone cells. Most bones also contain bone marrow, where blood cells are made.**

**Bones work with muscles and joints to hold our body together and support freedom of movement. This is called the musculoskeletal system. The skeleton supports and shapes the body and protects delicate internal organs such as the brain, heart and lungs.**

**Bones contain most of our body's calcium supply. The body is constantly building up and breaking down bone tissue as required. Healthy bone needs a balanced diet, regular weight-bearing exercise and the right levels of various hormones.**

**1. Which of the following statements is true regarding skeletal system**

- a) Bones are rigid immovable.**
- b) Bones provide a framework for the body and protect of blood cells**
- c) The skeletal system is not involved in formation blood cells**
- d) Bones do not store minerals like calcium and phosphorus.**

**2. How many bones are there in our skull ?**

- a) 33**
- b) 37**
- c) 42**
- d) 9**

**3. How many bones are there in our rib cage ?**

- 1) 12 pairs
- 2) 24 pairs
- 3) 6 pairs
- 4) 4 pairs

**Q10. Draw a neat and well labeled diagram of digestive system ?**

# DAV MODEL SCHOOL, KSTP, ASANSOL

SESSION: 2024-2025

## WORKSHEET – 1

SUBJECT: SOCIAL SCIENCE (CH: 1,2,3)

CLASS: V

NAME: \_\_\_\_\_ ROLL NO: \_\_\_\_\_ SECTION: \_\_\_\_\_ (1)

1. Choose the correct option.

i. The first learning place of a child is----

- a. Family
  - b. Country
  - c. Neighbourhood
  - d. School
- 

ii. People were unable to travel abroad in olden times due to

- a. Myths
  - b. Lack of money
  - c. Lack of transportation
  - d. Lack of energy
- 

iii. The number of Bhimbetka rock shelters is

- a. 700
  - b. 900
  - c. 7000
  - d. 1200
- 

iv. Houses having sloping roofs are found in

- a. Plains
  - b. Hilly regions
  - c. Coastal regions
  - d. Earthquake prone areas
- 

v. Stilt houses are made of

- a. Mud
- b. Bamboo
- c. wood

(2)

d. Both b and c

---

2. Fill in the blanks.

a. The family system works like a \_\_\_\_\_.

b. Animals migrate with change in \_\_\_\_\_.

c. Bhimbetka rock \_\_\_\_\_ are in Madhya Pradesh.

d. In cities flats are common because of \_\_\_\_\_ land and many people.

e. Many migrants start \_\_\_\_\_ when they do not get any work.

3. List two qualities that you admire in your mother/ father.

---

---

---

4. What is Shifting Agriculture?

---

---

---

5. Name the two types of forced migration.

---

---

---

6. Give two advantages of high-rise apartments.

---

---

---

7. What do you mean by the term migration?

---

---

---

(3)

8. What is the importance of a family?

---

---

---

---

---

---

---

---

9. Briefly describe the three types of migration.

---

---

---

---

---

---

---

---

10. Migration brings happiness to many people. Explain with example.

---

---

---

---

---

---

---

---

---

---

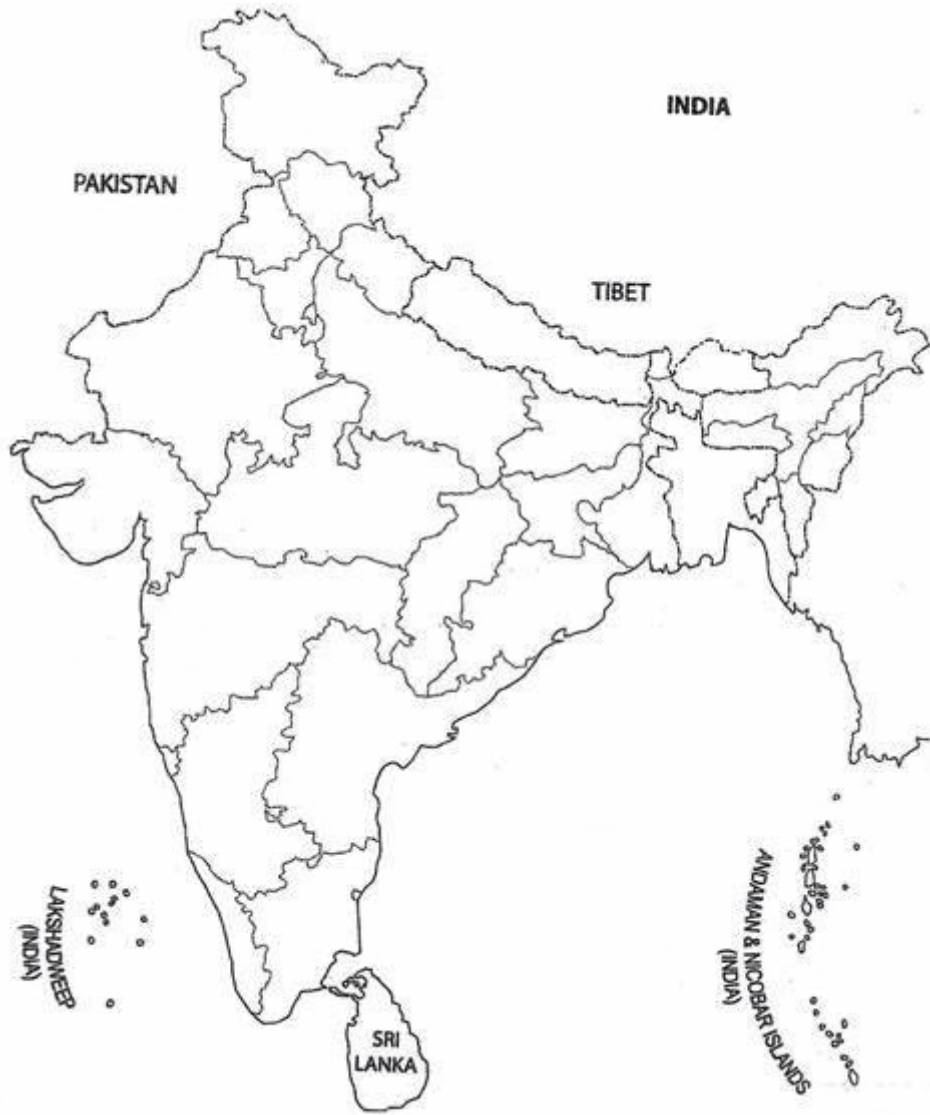
---

11. On the political map of India, locate, label and colour the following.

- a. A state where houseboats are used.
- b. One state situated along the Arabian Sea.



(4)



DAV MODEL SCHOOL, KSTP, ASANSOL

SESSION: 2024-2025

WORKSHEET – 2

SUBJECT: SOCIAL SCIENCE (CH: 1,2,3)

CLASS: V

NAME: \_\_\_\_\_ ROLL NO: \_\_\_\_\_ SECTION: \_\_\_\_\_ (1)

1. Choose the correct option.

i. Langar is a

- a. community feast
  - b. community dance
  - c. music
  - d. all of them
- 

ii. The earliest form of shelter was

- a. hut
  - b. cave
  - c. flats
  - d. water bodies
- 

iii. The volume of radio at night should be kept

- a. high
  - b. low
  - c. none of these
  - d. all of these
- 

iv. The houses have flat roofs in

- a. Kashmir
  - b. Manipur
  - c. Rajasthan
  - d. Both a and b
- 

v. Neighbourhood Watch Plan is a wonderful way of

- a. crime prevention
- b. ensuring safety
- c. Both a and b

(2)

d. None of these

---

2. Fill in the blanks.

a. Stilt houses protect the \_\_\_\_\_ from wild animals.

b. We can organise \_\_\_\_\_ pool with neighbours.

c. In 2014, \_\_\_\_\_ valley devastated by floods.

d. Each family follows certain customs and \_\_\_\_\_.

e. All family members must participate in family \_\_\_\_\_.

3. Name two things that changed the orthodox thinking of people.

---

---

---

4. What is Neighbourhood Watch Plan?

---

---

---

5. What are the walls of huts made of in villages?

---

---

---

6. Give two advantages of Stilt houses.

---

---

---

7. Why does praise by family members make you happy?

---

---

---

(3)

8. List three hardships that the migrants face.

---

---

---

---

---

---

---

---

---

---

9. What facilities are needed by people in case of disaster?

---

---

---

---

---

---

---

---

---

---

---

---

10. Draw and label two types of houses.

---

---

---

---

---

---

---

---

---

---

---

---

---

---

---

---

---

---

---

---

---

---

---

---

11. On the political map of India, locate, label and colour the following.

a. State where Bhimbetka caves are located.

b. One group of islands.



PAKISTAN

INDIA

TIBET

SRI  
LANKA

LAKSHADWEEP  
(INDIA)

ANDAMAN & NICOBAR ISLANDS  
(INDIA)

**D.A.V. MODEL SCHOOL, KSTP, ASANSOL**  
**HOLIDAY HOME WORK (SUMMER VACATION)**  
**SESSION: 2024-2025**

**WORK SHEET NO.:-1**

**SUBJECT: SANSKRIT**

**CLASS: V**

Name \_\_\_\_\_ Roll No: \_\_\_\_\_

Section: \_\_\_\_\_.

अधोलिखितम् गद्यांशं पठित्वा प्रश्नानान् उत्तराणि लिखत।

अहा ! मधुरा प्रभातवेला । आकाशे सूर्यः उदितः। अन्धकारः गतः। सर्वत्र प्रकाशः एव प्रकाशः अस्ति । खगाः आकाशे अत्र-तत्र भ्रमन्ति । वृक्षेषु वानराः कुर्वन्ति। जनाः प्रसन्नाः सन्ति। ते उद्यानेषु भ्रमन्ति धावन्ति च। बालाः अपि उद्यानेषु क्रीडन्ति। पशवः अपि प्रसन्नाः सन्ति। ते वनेषु अत्र-तत्र गच्छन्ति। सर्वे जनाः स्वकार्येषु संलग्नाः भविष्यन्ति।

1)निर्देशानुसारं समुचितं उत्तरत लिखत ।

क) \_\_\_\_\_ प्रसन्नाः सन्ति। (पशवः , बालाः ,खगाः )

ख)सुखदायिनी \_\_\_\_\_। ( प्रभातवेला, संध्यावेला)

ग) \_\_\_\_\_ वृक्षेषु कुर्वन्ति। (वानराः , जनाः, खगाः )

घ) \_\_\_\_\_ क्रीडन्ति। (वानराः , बालाः )

2) एकपदेन उत्तरत ।

क) खगाः कुत्र भ्रमन्ति ?

\_\_\_\_\_।

ख) वानराः कुत्र कुर्वन्ति?

\_\_\_\_\_।

ग)सूर्यः कुत्र उदितः?

\_\_\_\_\_।

घ) का सुखदायिनी?

\_\_\_\_\_।

3) पूर्णवाक्येन उत्तरत ।

क) जनाः केषु संलग्नाः भविष्यन्ति?

---

---

ख) के प्रसन्नाः सन्ति?

---

---

4) समुचितं शब्दार्थम् लिखन्तु।

(मञ्जुषा - सब जगह, यहाँ-वहाँ, घूम रहा है, मीठा)

मधुरा - \_\_\_\_\_।

अत्र- तत्र - \_\_\_\_\_।

सर्वत्र - \_\_\_\_\_।

भ्रमन्ति - \_\_\_\_\_।

5) चित्रं दृष्ट्वा रिक्तस्थानानि पूरयन्तु।



---



---



---



---




## 6) अधोलिखितानि रिक्तस्थानानि पूरयन्तु।


(मञ्जुषा - एषा, एषः, एषः, एषा )



क) \_\_\_\_\_ चिकित्सकः अस्ति।



ख) \_\_\_\_\_ चिकित्सिका अस्ति।



ग) \_\_\_\_\_ नर्तकः अस्ति ।



घ) \_\_\_\_\_ नर्तकी अस्ति।

## 7) समुचितं शब्दार्थं लिखन्तु।

(मञ्जुषा -आगच्छ, अनुजः, पश्यतु, मम, एषः )

छोटा भाई - \_\_\_\_\_।

मेरा - \_\_\_\_\_।

देखो- \_\_\_\_\_।

ये - \_\_\_\_\_।

आओ - \_\_\_\_\_।



8) चित्रं दृष्ट्वा रिक्तस्थानानि पूरयन्तु।

( मञ्जुषा - सैनिकः, फलम्, लेखकः, महिला )



क) \_\_\_\_\_ लेखम् लिखति।



ख) \_\_\_\_\_ अन्नम् पचति ।



ख) आम् \_\_\_\_\_ पतति ।




घ) \_\_\_\_\_ देशम् रक्षति ।


9) उपयुक्तवर्णेन रिक्तस्थानानि पूरयन्तु ।

अ \_\_\_\_\_ इ \_\_\_\_\_ ऊ ऋ ॠ \_\_\_\_\_ ए \_\_\_\_\_ औ ।

1. चित्रों के नाम लिखिए -





\_\_\_\_\_



\_\_\_\_\_

2. एक वचन और बहुवचन लिखें -




3. समान लय वाले शब्द लिखिए -

बस

रेल

अंडा



केला

शहर

पाठ

4. विपरीतार्थक शब्द लिखिए -

ऊपर

आगे

अमीर

मोटा


रात

सुबह

शहर

सुख

छोटा



5. सही मात्रा लगाकर दुबारा लिखिए -

सरज

चीटी

कयल

शश

बढ़ा

रमश

गाव

मग

